


ADARSH PUBLIC SCHOOL

CLASS- IV  
SESSION 2019-20

Name: \_\_\_\_\_

Section: \_\_\_\_\_

**HOLIDAY FUN WITH WORK AND PLAY**  
Let's make our vacation fruitful and gay!



Dear Parent

The much awaited winter holidays are just around the corner. Holidays give delight to all children as it's time for rest and recreation. The well deserved opportunity to relax and rewind by indulging in the work that is pleasurable and at the same time educative. Here are some specially designed worksheets that will promote learning and recapitulation of the topics covered. You are requested to guide, motivate and facilitate your children in completing their holidays homework. Children must complete the task given on their own.

*Wishing you all a blessed New Year filled with happiness, positivity and good family time!*

*Have a great vacation.*

Warm regards

Manjula  
Class Coordinator

## ENGLISH ASSIGNMENT


1. Write adjective for each picture and use them in sentences for positive, comparative and superlative degrees in space given below.



---

---


---



---

---


---



---

---

---



---

---

---

2. Convert the following as instructed.

a. We don't grow vegetables in our garden. (Simple Past Tense)

---

b. My son lives in London. (Present Continuous tense)

---

c. He sent an email to the company. (Interrogative sentence)

---

d. I bought a new car. (Simple Future Tense)

---

f. The students study for the final exam. (Simple Future Tense)

---

g. She prepares delicious cookies for her mother. (Present Continuous Tense)

---

3. Assume that you are Rahul/Renu, organizing your sister's surprise birthday party. Write a paragraph using Simple Future tense about the arrangements you are planning to have for the party. Draw and decorate a lovely cake. Do this work in English notebook.

**4. Complete the sentences by adding suitable adjective or adverb from the bracket.**

- a. My classmate is a \_\_\_\_\_ person. (nice, nicely)
- b. Mr. Smith looked \_\_\_\_\_ at me when I arrived late. (angry, angrily)
- c. The music is too \_\_\_\_\_. Please turn it down. (loud, loudly)
- d. The little boy \_\_\_\_\_ kept the cookie for himself. (selfish, selfishly)
- e. A fireman \_\_\_\_\_ rescued the people from the burning house. (brave, bravely)
- f. The cat waited \_\_\_\_\_ for the mouse to come out of the hole. (silent, silently)

**5. Complete the story by using Simple Past tense.**

One day a lion \_\_\_\_\_(walk) through the forest when he \_\_\_\_\_(step) on a thorn. He \_\_\_\_\_(get) hurt and \_\_\_\_\_(cry) in pain. Suddenly he \_\_\_\_\_(meet) a shepherd and \_\_\_\_\_(seek) help from him. The shepherd \_\_\_\_\_(see) that the lion \_\_\_\_\_(limp) . He \_\_\_\_\_(examine) his paw. He \_\_\_\_\_(find) the thorn and \_\_\_\_\_(pull) it out. The lion \_\_\_\_\_(wag) his tail to thank him. Some people \_\_\_\_\_(do) not like shepherd. They \_\_\_\_\_(say) that he \_\_\_\_\_(is) a thief. One day, the king's soldiers \_\_\_\_\_(come) to arrest him. They \_\_\_\_\_(take) him to the king. The king \_\_\_\_\_(order) them to throw the shepherd into lion's cage. The lion \_\_\_\_\_(roar) loudly seeing the man, but when he \_\_\_\_\_(come) near, at once he \_\_\_\_\_(recognise) the shepherd. He \_\_\_\_\_(is) the same lion whom the shepherd had helped in the forest . When the king \_\_\_\_\_(know) why the lion didn't kill the shepherd, he \_\_\_\_\_(give) orders to free both of them.

**6. Frame sentences with the help of clue box in Present Continuous tense. (Subject -verb agreement to be kept in consideration.)**

**AT THE PARK**

are riding	The girls	their bikes.
Meghna and Ryan	running	are
The boys	a Frisbee	are throwing
a ball	are kicking	Mary and Tom
is	hopping	John
am climbing	I	a tree

- a. \_\_\_\_\_
- b. \_\_\_\_\_
- c. \_\_\_\_\_
- d. \_\_\_\_\_
- e. \_\_\_\_\_
- f. \_\_\_\_\_

## MATHEMATICS ASSIGNMENT

**1. Write in the short form:**

- a. Rs. 92,10 paise  
b. 90 paise  
c. Rs. 23,89 paise  
d. Rs. 34,9 paise

**2. Solve the following:**

- a.  $\text{Rs. } 238.50 + \text{Rs. } 678.90 + \text{Rs. } 567.90$   
b.  $\text{Rs. } 456.90 \div 5$   
c.  $\text{Rs. } 890 \times 89$   
d.  $\text{Rs. } 245.05 - \text{Rs } 198.75$

**3. Which is lighter? 7kg67g or 7890g**

**4. How many days are there in a leap year?**

**5. Convert the time according to 24 hour clock time:**

- a. 2:00 a.m.  
b. 12:07 p.m.  
c. 6:00 p.m.  
d. 8:00 a.m.

**6. Convert the following:**

- a. 7 km 205 m into metres  
b. 4689L into millilitres  
c. 87906m into kilometres and metres  
d. 19005g into kilogram and grams

**7. Sahil bought a geometry box for Rs. 48.75, an eraser for Rs. 3.25 and a chocolate for Rs. 12.50. He gave a 100 rupee note to the shopkeeper .How much did he get back?**

**8. A fair started on 5<sup>th</sup> February and ended on 6<sup>th</sup> March. How long did the fair last?**

**9. Ragini started her dance practice at 11:40 a.m. and ended at 2:10 p.m. For how long did she practice?**

**10. Find the perimeter of the following:**

- a. A square with sides 2cm each
- b. A rectangle with length 6cm and breadth 4cm
- c. A triangle with side 5cm, 6 cm and 8 cm

**11. Draw the line segments of the following lengths:**

- a. 6cm
- b. 0.7cm
- c. 7.5cm
- d. 9.8cm

**12. How many 250 ml bottles are needed to fill a 1litre bottle?**

**13. What time will it be:**

- a. 3 hours after 12:10 p.m.
- b. 5 hours before 9:00 a.m.

**14. Prices of items in a general store are given below:**

Items	Quantity	Price (in Rs)
Rice	1kg	78
Atta	1kg	45
Daal	1kg	89
Soap	200g	65
Toothpaste	100g	54
Powder	500g	456
Biscuits	I packet	6

Using the above price list prepare a bill:

3kg daal, 2kg rice, 5 packet biscuits, 100g soap

**\* Paste and solve this assignment in classwork notebook.**

**15. Learn tables from 2 to 20**

**16. Make your one day routine using 24 hour clock time in A4 size sheet.**

## हिन्दी अभ्यास पत्र

प्रश्न -1

दिए गए चित्रों के आधार पर पर्यायवाची शब्द लिखो ।



\_\_\_\_\_

\_\_\_\_\_



\_\_\_\_\_

\_\_\_\_\_



\_\_\_\_\_

\_\_\_\_\_



\_\_\_\_\_

\_\_\_\_\_

प्रश्न-2

नीचे लिखी कहानी में कुछ अनेक शब्दों का समूह छिपा हुआ है । उन्हें छांटकर एक शब्द के साथ लिखो ।

मुझे सड़क पर एक व्यक्ति मिला जो पढ़ा – लिखा नहीं था। वह व्यक्ति गाँव का रहने वाला था। वह शाक-सब्जी खाता था। उसका नाम मदन था। मदन जूते बनाने का काम करता था। उसके हृदय में सबके लिए बहुत दया थी । वह सबकी भलाई चाहता था। वह एक अच्छा इंसान था । मदन सदा हँसता रहता था ।

अनेक शब्द

-----  
-----  
-----  
-----  
-----  
-----  
-----

एक शब्द

-----  
-----  
-----  
-----  
-----  
-----  
-----

प्रश्न-3

नववर्ष 2020 का पहला दिन आपने कैसे व्यतीत किया, अपना अनुभव सबके साथ बाँटिये व नीचे दिए गए शीर्षक पर अनुच्छेद कार्य-पुस्तिका में लिखकर एक सुंदर चित्र के साथ प्रस्तुत कीजिए।

शीर्षक- नववर्ष का पहला दिन

प्रश्न-4

“मैजिक वर्ड” का प्रयोग करते हुए एक प्यार भरा संदेश अपने परिजनों के लिए कार्ड बनाकर उसमें लिखें ।

प्रश्न-5 इन चित्रों में होने वाली क्रियाओं को वाक्यों में लिखो ।

1



-----

2



-----

3



-----

4



-----

प्रश्न-6 चित्र को ध्यानपूर्वक देखकर दस पंक्तियों में उसका वर्णन करो ।



-----  
-----  
-----  
-----  
-----  
-----  
-----  
-----  
-----  
-----

# SCIENCE ASSIGNMENT

## 1. Answer the following in one word:

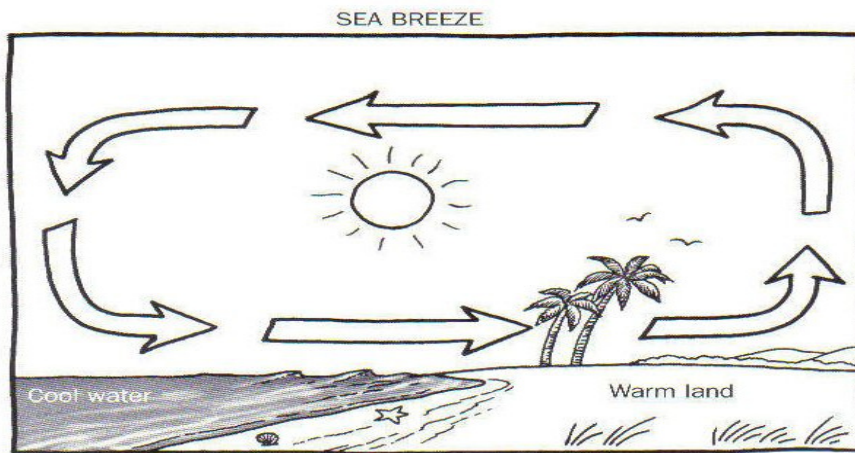
Who am I?

- a. I am very important natural resource in which plants grow \_\_\_\_\_
- b. I am a type of soil which is yellow or light brown in colour \_\_\_\_\_
- c. I am formed by remains of dead plants and animals \_\_\_\_\_
- d. I am the topmost layer of the soil \_\_\_\_\_
- e. I am an animal that lives in the soil \_\_\_\_\_

## 2. Multiple Choice Questions:

- a. A type of soil that has space between its particles which allow water to pass through it easily?
  - (i) Sand
  - (ii) Gravel
  - (iii) Clay
- b. Process by which big pieces of rocks breakdown by heat, air, water?
  - (i) Humus
  - (ii) Weathering
  - (iii) Fine sand
- c. Topmost layer of soil that contains remains of dead plants and animals?
  - (i) Humus
  - (ii) Sand
  - (iii) Topsoil

## 3. Write in your own words about the following image:



---

---

---

---



**4. Fill in the blanks:**

- a. The wind that blows gently and lightly is called\_\_\_\_\_
- b. \_\_\_\_\_ is added to kill germs present in water.
- c. \_\_\_\_\_ and \_\_\_\_\_ are two agents of soil erosion.
- d. The removal of topsoil is called \_\_\_\_\_.
- e. \_\_\_\_\_ is the major cause of soil erosion.

**5. Give reasons for the following in your own words:**

- a. Why the land gets hotter soon in day time than water?

---

---

---

- b. Why water evaporates faster in summers and slower in winters?

---

---

---

- c. How are the clouds formed?

---

---

---

- d. Why do we feel sticky during rainy season?

---

---

---



---

---

c. What is marine fishing?

---

---

d. How is cinema an important means of communication?

---

---

e. How did early humans travel?

---

---

**V. The underlined word in each sentence is incorrect. Write the correct word.**

a. Marine fishing is popular in Chhattisgarh. \_\_\_\_\_

b. An iron and steel plant is an example of small scale industry. \_\_\_\_\_

c. The goods that we use are made from resources. \_\_\_\_\_

d. The written documents can be sent through a xerox machine. \_\_\_\_\_

e. The perishable goods are transported by trains. \_\_\_\_\_

f. Grinding flour is an example of large-scale industry. \_\_\_\_\_

**VI. Paste two pictures each of the following on A4 sized sheet.**

a. Cash crops

b. Livestock animals

c. Food crops

d. Roadways

e. Means of communication